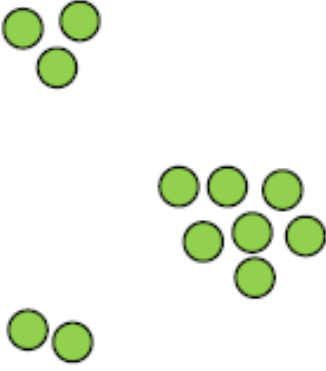




Unequal groups to equal groups

Draw or write the groups you made.

The unequal group I started with:	Equal groups I made.
 <p>12 counters</p>	<p>6 equal groups of 2 </p> <p>4 equal groups of 3 </p> <p>3 equal groups of _____</p>

The unequal group I started with:	Equal groups I made.
	<p>_____ equal groups of _____</p> <p>_____ equal groups of _____</p> <p>_____ equal groups of _____</p>

The unequal group I started with:	Equal groups I made.
	<p>_____ equal groups of _____</p> <p>_____ equal groups of _____</p> <p>_____ equal groups of _____</p>